

# EMG and Muscle Fatigue

## OBJECTIVES

In this experiment, you will use a Vernier Hand Dynamometer to measure maximum grip strength and correlate this with electrical activity of the muscles involved as measured using the Vernier EKG Sensor. You will see if electrical activity changes as a muscle fatigues during continuous maximal effort. Finally, you will observe the results of a conscious effort to overcome fatigue in the muscles being tested.

In this experiment, you will

- Obtain graphical representation of the electrical activity of a muscle.
- Correlate grip strength measurements with electrical activity data.
- Correlate measurements of grip strength and electrical activity with muscle fatigue.
- Observe the effect on grip strength of a conscious effort to overcome fatigue.

## MATERIALS

computer  
Vernier computer interface  
Logger Pro

Vernier Hand Dynamometer  
Vernier EKG Sensor  
electrode tabs

## PROCEDURE

Select one person from your lab group to be the subject.

### Part I Grip Strength without Visual Feedback

1. Connect the Hand Dynamometer and the EKG Sensor to the Vernier computer interface. Open the file “18 EMG and Muscle Fatigue” from the *Human Physiology with Vernier* folder.
2. Zero the readings for the Hand Dynamometer.
  - a. Click the Zero button, .
  - b. Hold the Hand Dynamometer along the sides, in an upright position (see Figure 2). Do not put any force on the pads of the Hand Dynamometer.
  - c. Click the box in front of Hand Dynamometer to select it and click .
3. Attach three electrode tabs to on of your arms, as shown in Figure 3. Two tabs should be placed on the ventral forearm, 5 cm and 10 cm from the medial epicondyle along an imaginary line connecting the epicondyle and the middle finger.
4. Attach the green and red leads to the tabs on ventral forearm. For this activity, the green and red leads are interchangeable. Attach the black lead to the upper arm.
5. Have the subject sit with his/her back straight and feet flat on the floor. The elbow should be at a 90° angle, with the arm unsupported.
6. Have the subject close his/her eyes, or avert them from the screen.
7. Instruct the subject to grip the sensor with full strength and click  to begin data collection. The subject should exert maximum effort throughout the data-collection period.
8. At 80 s, the lab partner(s) should encourage the subject to grip even harder. Data will be collected for 100 s.

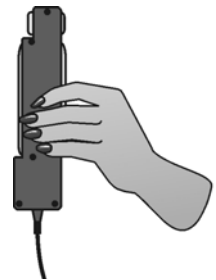


Figure 2

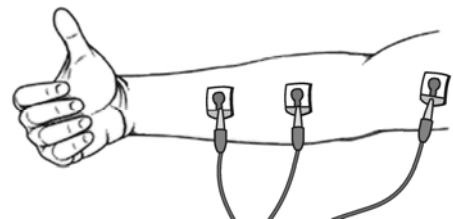







Figure 3

9. Record statistical information about the grip strength data.
  - a. Position the cursor at 0 s on the Grip Strength graph (the top graph). Click and drag to highlight 0–20 s on the graph. Click the Statistics button, . Record the mean force during that interval in Table 1, rounding to the nearest 0.1 N.
  - b. Move the statistics brackets to highlight the time interval between 60 and 80 s on the same graph. Record the mean force during that interval in Table 1 (round to the nearest 0.1 N).
  - c. Move the statistics brackets to highlight the time interval between 80 and 100 s. Record the mean force during that interval in Table 1, rounding to the nearest 0.1 N.
10. Record statistical information about the EMG data.
  - a. Position the cursor at 0 s on the EMG graph (the bottom graph). Click and drag to highlight 0–20 s on the graph. Click the Statistics button, . Record the maximum and minimum mV during that interval in Table 1, rounding to the nearest 0.01 mV.
  - b. Move the statistics brackets to highlight the time interval between 60 and 80 s on the same graph. Record the maximum and minimum mV during that interval in Table 1, rounding to the nearest 0.01 mV.
  - c. Move the statistics brackets to highlight the time interval between 80 and 100 s on the EMG graph. Record the maximum and minimum mV during that interval in Table 1, rounding to the nearest 0.01 mV.
  - d. Calculate the difference between each minimum and maximum value and record this value in the  $\Delta$ mV column in Table 1.

## Part II Grip Strength with Visual Feedback

11. Have the subject sit with his/her back straight and feet flat on the floor. The Hand Dynamometer should be held in the same hand used in Part I of this experiment. Instruct the subject to position his/her elbow at a 90° angle, with the arm unsupported, and to close his/her eyes, or avert them from the screen.
12. Instruct the subject to grip the sensor with full strength and click  to begin data collection. The subject should exert near maximum effort throughout the duration of the experiment.
13. At 80 s, instruct the subject to watch the screen, and attempt to match his/her beginning grip strength (the level achieved in the first few seconds of the experiment) and to maintain this grip for the duration of the experiment. Data will be collected for 100 s.
14. Record statistical information about the grip strength data.
  - a. Position the cursor at 0 s on the Grip Strength graph (the top graph). Click and drag to highlight 0–20 s on the graph. Click on the Statistics button, . Record the mean force during that interval in Table 2, rounding to the nearest 0.1 N.
  - b. Move the statistics brackets to highlight the time interval between 60 and 80 s on the same graph. Record the mean force during that interval in Table 2, rounding to the nearest 0.1 N.
  - c. Move the statistics brackets to highlight the time interval between 80 and 100 s on the same graph. Record the mean force during that interval in Table 2, rounding to the nearest 0.1 N.
15. Record statistical information about the EMG data.
  - a. Position the cursor at 0 s on the EMG graph (the bottom graph). Click and drag to highlight 0–20 s on the graph. Click on the Statistics button, . Record the maximum and minimum mV during that interval in Table 2, rounding to the nearest 0.01 mV.
  - b. Move the statistics brackets to highlight the time interval between 60 and 80 s on the same graph. Record the maximum and minimum mV during that interval in Table 2, rounding to the nearest 0.01 mV.
  - c. Move the statistics brackets to highlight the time interval between 80 and 100 s on the same graph. Record the maximum and minimum mV during that interval in Table 2, rounding to the nearest 0.01 mV.
  - d. Calculate the difference between each minimum and maximum value and record this value in the  $\Delta$ mV column in Table 2.